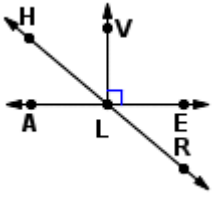
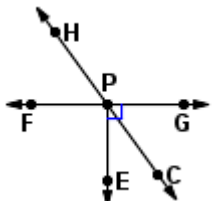
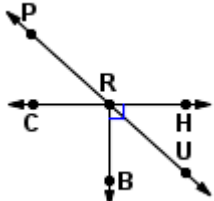
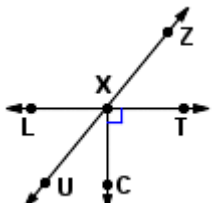
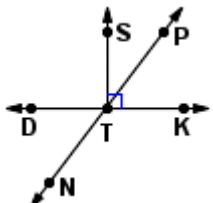
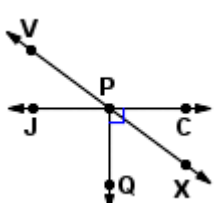
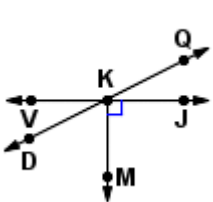
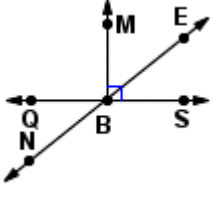
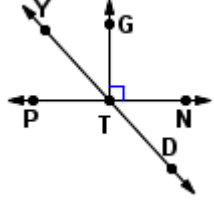
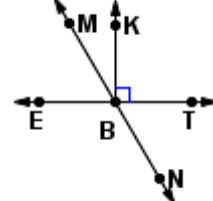
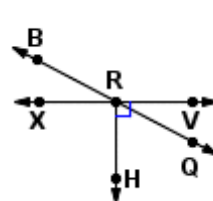
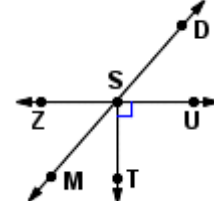


Naming Angles 2

Do Not Write On This Paper!

Number your paper 1-12 and answer each of the following.

<p>1.</p>  <p>Name a pair of vertical angles.</p>	<p>2.</p>  <p>Name a linear pair.</p>	<p>3.</p>  <p>Name a pair of complementary angles.</p>
<p>4.</p>  <p>Name a pair of vertical angles.</p>	<p>5.</p>  <p>Name a pair of supplementary angles.</p>	<p>6.</p>  <p>Name a linear pair.</p>
<p>7.</p>  <p>Name a pair of supplementary angles.</p>	<p>8.</p>  <p>Name a pair of vertical angles.</p>	<p>9.</p>  <p>Name a pair of vertical angles.</p>
<p>10.</p>  <p>Name a pair of complementary angles.</p>	<p>11.</p>  <p>Name a linear pair.</p>	<p>12.</p>  <p>Name a pair of vertical angles.</p>